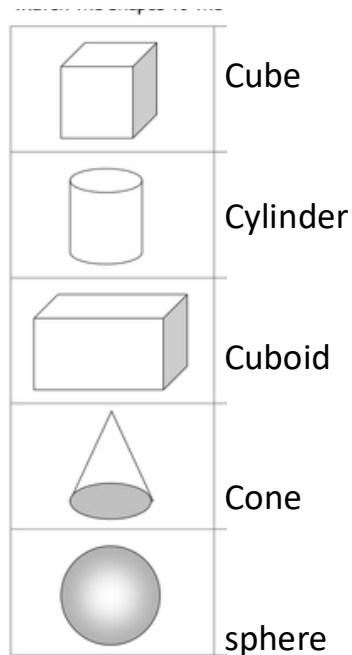


Year 2 Wednesday 25th March 2020

Good morning,

Firstly, big apologies for the home learning that was stuck in the children's green books. I completely forgot to delete the return date. There is no expectation to send this in.

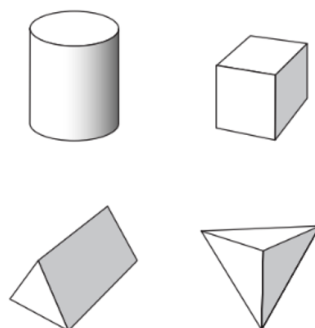
Continue learning your Times tables - 2s, 3s, 5s or 10xs tables.



Today, look at the shape problem below and try to work out the answer

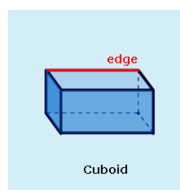
Two shapes have **more than 8** edges.

Tick them.

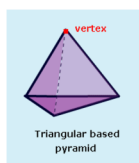


Continuing with the shape theme, find one item to match each of the 3 D shapes above. Today, I would like you to investigate the properties of each of these 3D shape. There are 3 different levelled challenges for you to have a go at below

Language you will need to know:

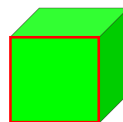


Cuboid



Triangular based pyramid

WE CAN ALSO SAY WHAT SHAPE THE FACE IS.



The face is the shape of a square.

All 3D shapes have vertices apart from a sphere.

All 3D shapes have edges apart from a sphere.

1

Complete the table.

Shape	Faces	Vertices	Edges
Cube			
Cuboid			
Cone			
sphere			
Cylinder			

2

I'm thinking of a shape. It has...

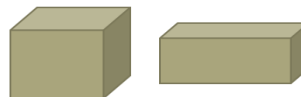
4 triangular faces and 1 square face.

It has 5 vertices and 8 edges.

What's the name of my shape?

3

What's the same? What's different?



Get yourself active with Supermovers

KS1 English: Syllables

<https://www.bbc.co.uk/teach/supermovers/ks1-english-syllables-with-joe-tracini/znt4nrd>

Get yourself outside and use your imagination. Make an Easter garden on a tray or on a plant pot base,



Watch the story of Easter.

<https://www.bbc.co.uk/teach/class-clips-video/religious-studies-ks1-the-christian-story-of-easter/zhgv47h>

Retell the Easter story then create your own cartoon strip of the story with drawings and a short sentence to go with each picture.



Continue daily reading together with an adult.

Enjoy your day. Dance like no-one is watching!

Mrs. Clelland

