

Core Activity:



Proportion and Ratio


1. Nine identical bags weigh **72 kg** altogether. How much does one bag weigh?

kg

2. Kai has some carrots and some potatoes.

There are **five** carrots for every potato.

Kai has **three** potatoes. How many carrots does he have?



carrots

3. Six chocolate eggs cost **£2.40**. How much do ten chocolate eggs cost?
Show your working in the box.

£

4. Here is a recipe for pancakes:

Pancake Recipe

250 ml milk

120 g flour

60 g butter


Grace makes some pancakes using **480 g** flour.

How much butter does she need?

g

How much milk does she need?

ml



Proportion and Ratio


5. Jake has **56** cupcakes to put into some cake tins.

He puts the same number of cupcakes into each tin. **5** tins contain **35** cupcakes in total.

How many tins are there altogether? Show your working in the box.

..... tins

6. Enlarge the shaded shape on the grid by a scale factor of **3**.



If you had enlarged the shaded shape by a scale factor of **8**,
how many squares long would the bottom of the enlarged shape be?

..... squares

7. Line B is **55 cm** long. It is an enlargement of line A which is **5 cm** long.

What is the scale factor of the enlargement?


.....



Proportion and Ratio

8. A grocery sells fruit boxes which include four oranges, three apples and one banana.
One day they sell **48** oranges in their fruit boxes.

How many apples did they sell?



..... apples

How many bananas did they sell?

..... bananas

9. Oscar is making some vegetable soup. He uses **9** carrots for every **5** parsnips.
Write down the ratio of carrots to parsnips by filling in the missing numbers.

	:	
--	---	--

Oscar uses **27** carrots. How many parsnips does he use?

..... parsnips

10. Matt and Cat won **£120** on the lottery.
They decide to share their winnings in the ratio 1 : 2.
How much money do they each get?

Matt £

Cat £

11. Dilna's CD collection is made up of classical and pop CDs in the ratio 2 : 5.
She has **8** classical CDs. How many pop CDs does she own?

.....

Are you a fully clued-up Number Adder when it comes to proportion? Rate yourself on these ratios by ticking here.

	<input checked="" type="checkbox"/>		<input type="checkbox"/>		<input type="checkbox"/>
--	-------------------------------------	--	--------------------------	--	--------------------------

