**Oceanic climate:**

The north of Spain has this climate. This area experiences warm summers and mild winters. There is a high amount of rainfall throughout the year, and fewer hours of sunshine than other climate zones in Spain.

Continental climate:

The majority of Spain has this climate. Summers are hot, with the highest number of hours of sunshine. There is a lot of rainfall in spring. Winters are cold enough for it to snow.

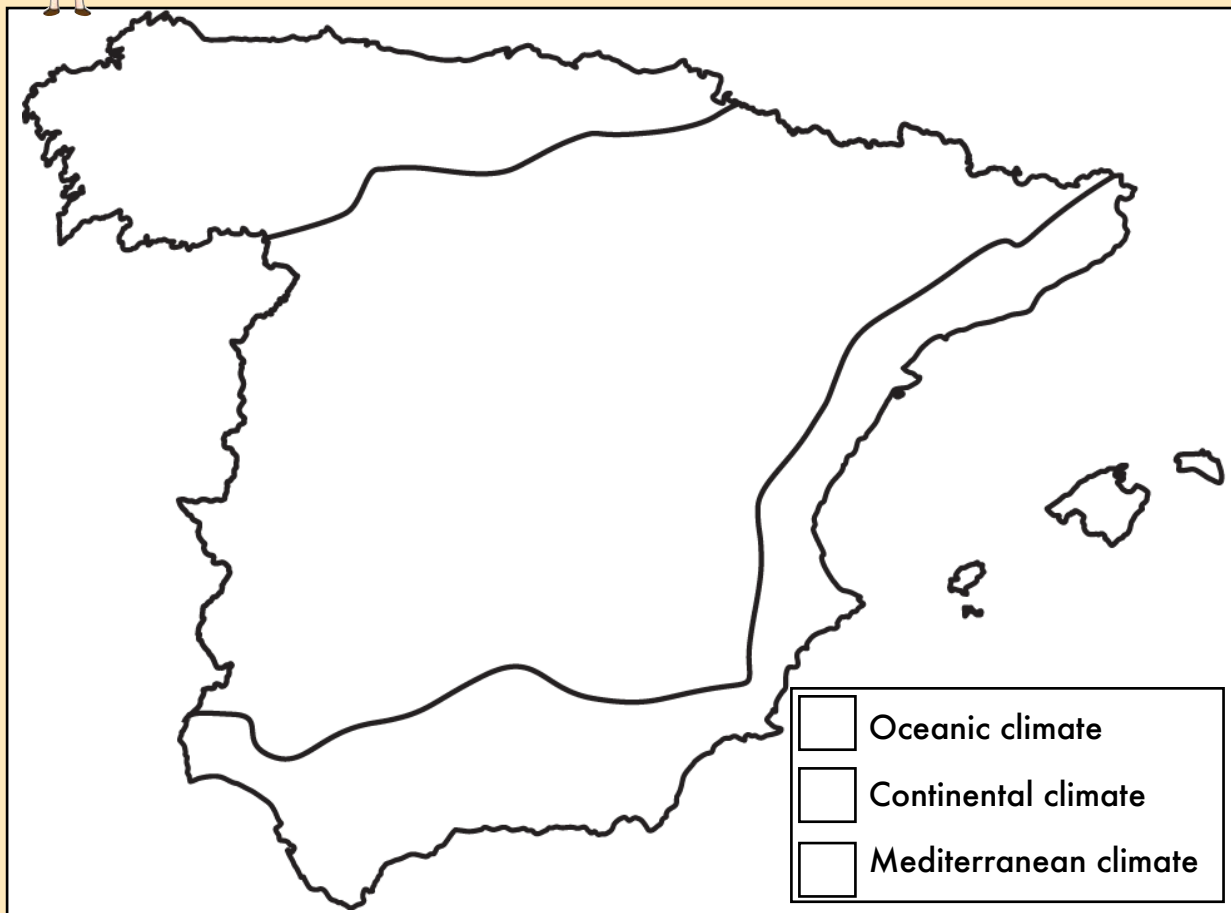
Mediterranean climate:

The south and east coasts of Spain have this climate. This area has mild, wet winters and warm, dry summers. There is not much difference between winter and summer temperatures.

Name: _____ Date: _____



Shade in the three main climate zones of Spain and complete the key.



Complete these sentences about the different climate zones in Spain.

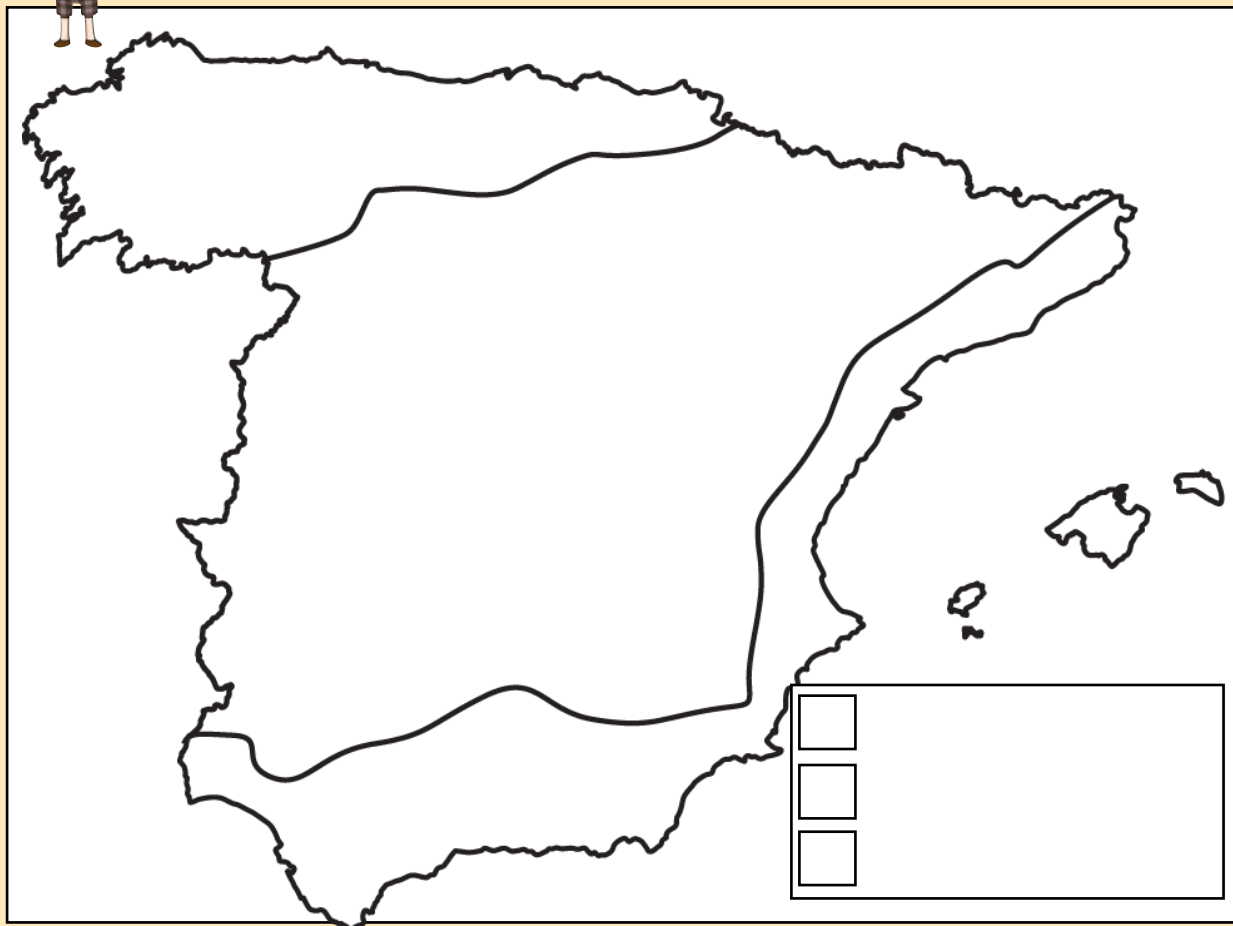


There are three main c _ _ _ _ _ zones in Spain. The n _ _ _ _ coast has an o _ _ _ _ _ climate. They have w _ _ _ summers and m _ _ _ winters. There is a high amount of r _ _ _ _ _ throughout the year. Most of Spain has a c _ _ _ _ _ climate. Winters are cold enough for s _ _ _ . Summers are h _ _ . There is a lot of rainfall in s _ _ _ _ . The s _ _ _ _ and e _ _ _ of the country have a m _ _ _ _ _ climate. There is not much difference between w _ _ _ _ and s _ _ _ _ temperatures.

Name: _____ Date: _____



Shade in the three main climate zones of Spain and make a key.



Write at least one sentence describing each of the three main climate zones in Spain.



Oceanic climate:

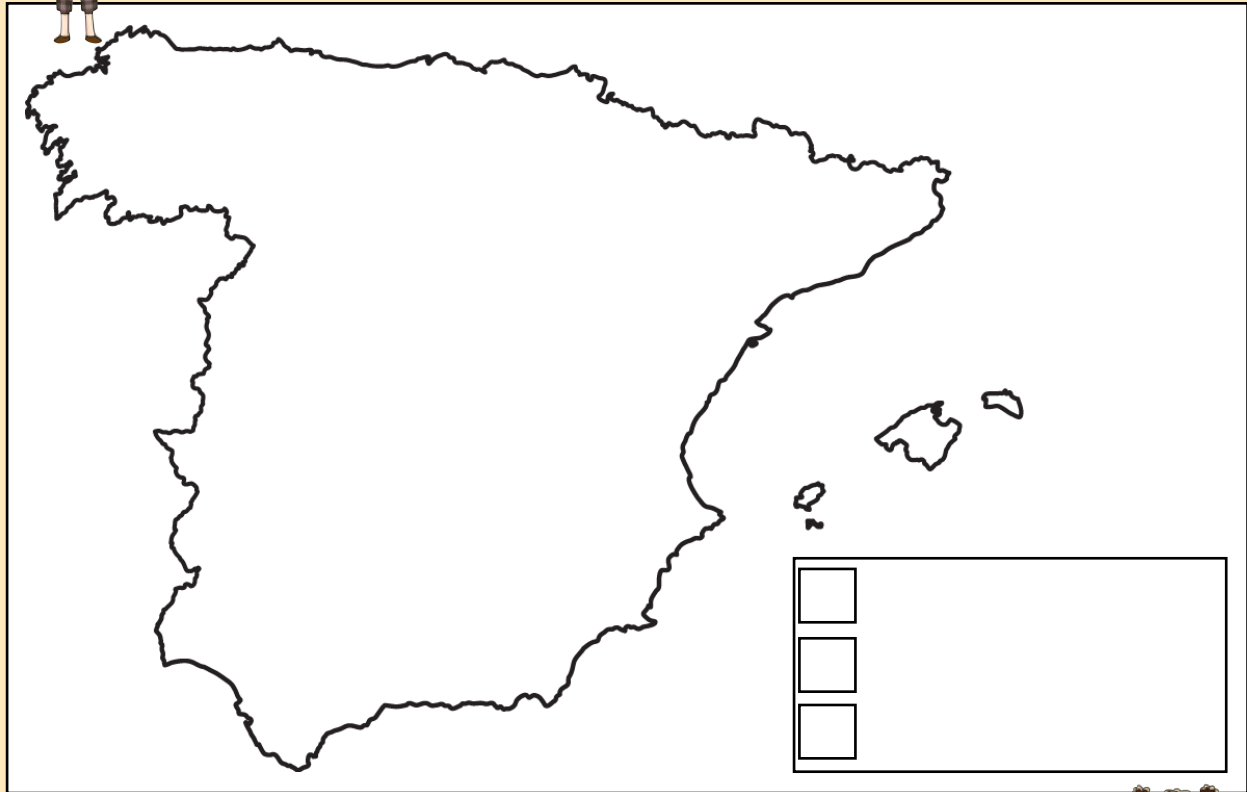
Continental climate:

Mediterranean climate:

Name: _____ Date: _____



Draw and shade in the three main climate zones of Spain, then make a key.

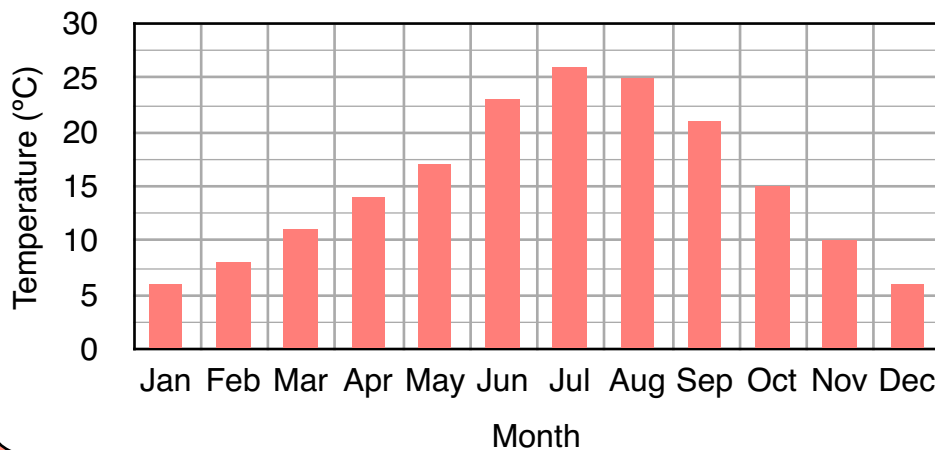


Answer these questions about the climate zones in Spain.

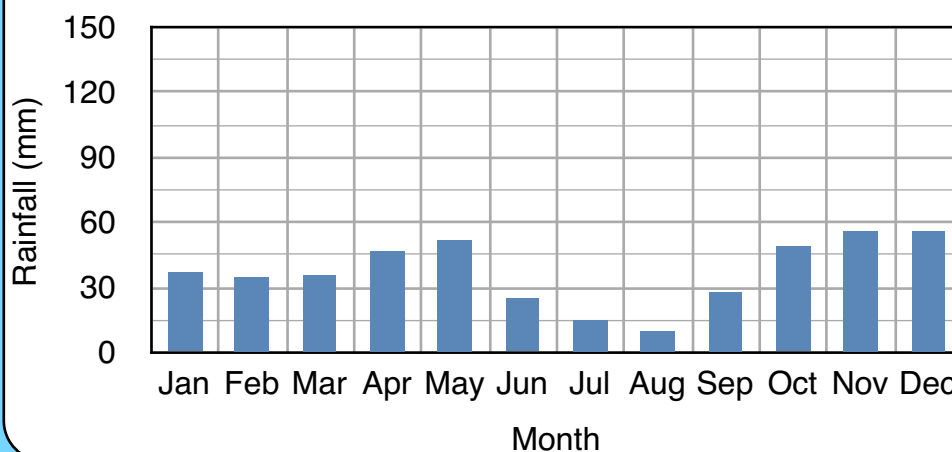


Which climate zone has the highest amount of rainfall?	What climate does the majority of Spain have?	In which climate is there a lot of rainfall in spring?
Which climate has mild, wet winters?	What climate would you find in the north of Spain?	What climate zone is the south and east of Spain in?
In which climate is it cold enough for snow?	Which climate has the highest amount of sunshine hours?	Which climate zone has the fewest hours of sunshine?

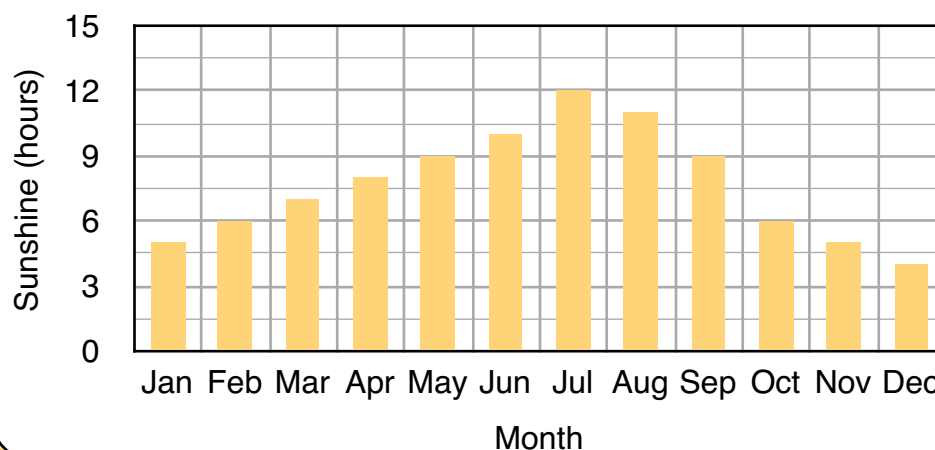
Average Temperature



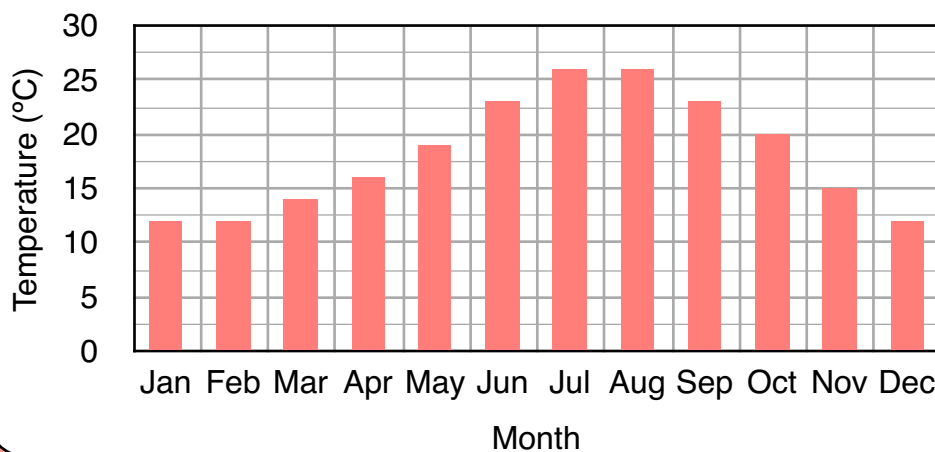
Average Rainfall



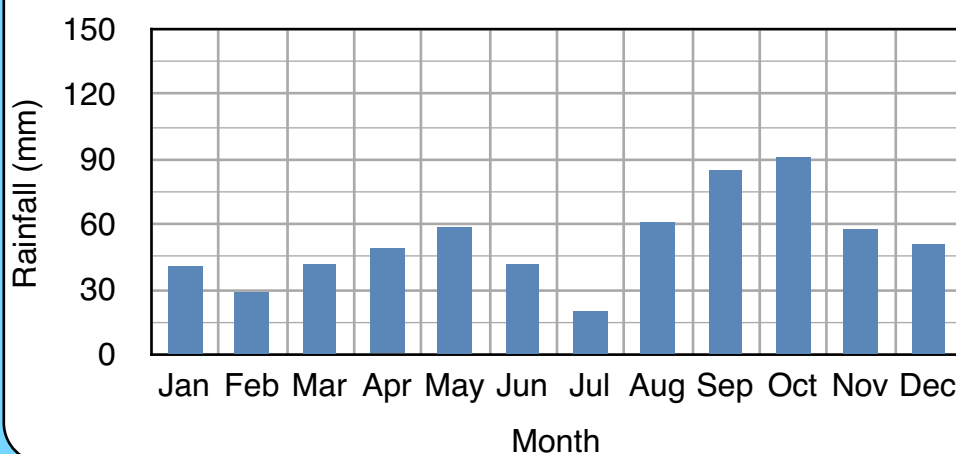
Average Daily Hours of Sunshine



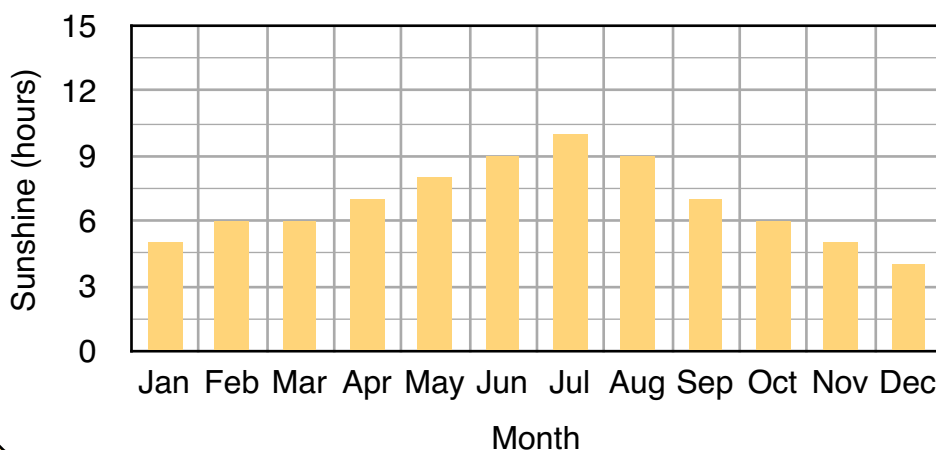
Average Temperature



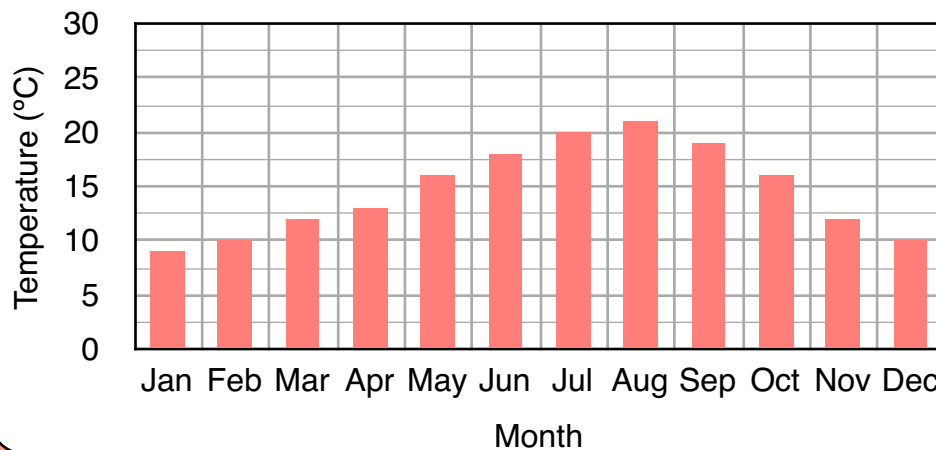
Average Rainfall



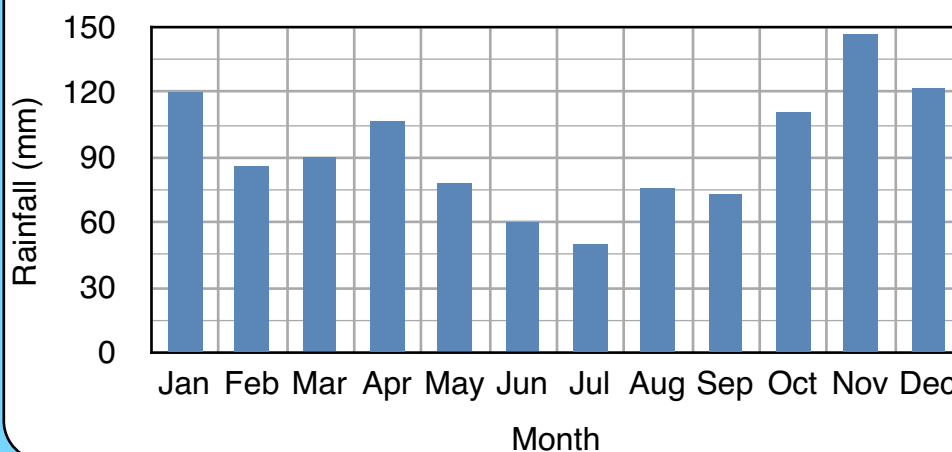
Average Daily Hours of Sunshine



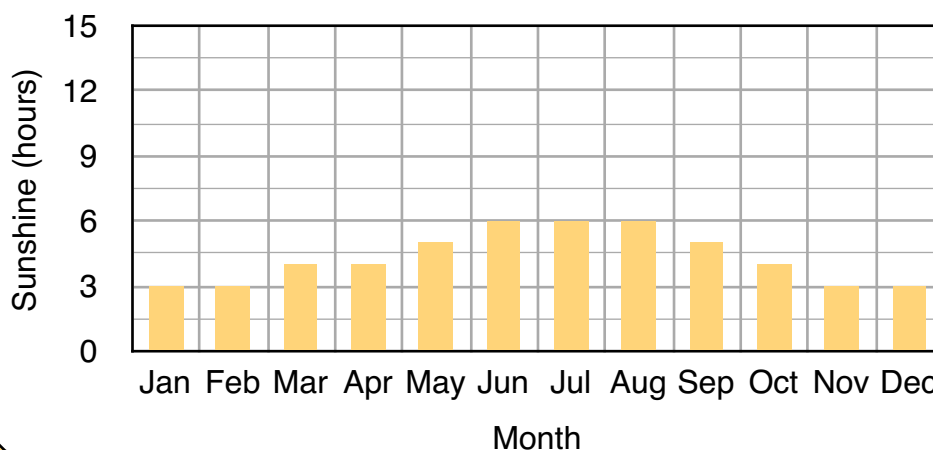
Average Temperature



Average Rainfall



Average Daily Hours of Sunshine



This city has the coolest summers.

This city has the lowest temperature in January.

This city has the highest temperature in July and August.

Average temperatures range from 9°C to 21°C.

Average temperatures range from 6°C to 26°C.

Average temperatures range from 12°C to 26°C.

This city has the highest rainfall in November.

In this city, August is the month with the least rainfall.

In this city, October is the month with the most rainfall.

Average rainfall amounts range from 50mm to 147mm per month.

Average rainfall amounts range from 10mm to 56mm per month.

Average rainfall amounts range from 20mm to 91mm per month.

This city has the least amount of sunshine hours throughout the year.

This city has the most amount of sunshine hours throughout the year.

In August, this city has 7 hours of sunshine per day on average.

The average amount of sunshine ranges from 3 to 6 hours per day.

This city has the most sunshine hours in July.

The average amount of sunshine ranges from 4 to 10 hours per day.

Oceanic climate:

The north of Spain has this climate. The summers are warm and the winters are mild. There is a high amount of rainfall throughout the year, and fewer hours of sunshine than other climate zones in Spain.

Continental climate:

The majority of Spain has this climate. Summers are hot, with the highest number of hours of sunshine. There is a lot of rainfall in spring. Winters are cold enough for it to snow.

Mediterranean climate:

The south and east coasts of Spain have this climate. This area has mild, wet winters and warm, dry summers. There is not much difference between winter and summer temperatures.

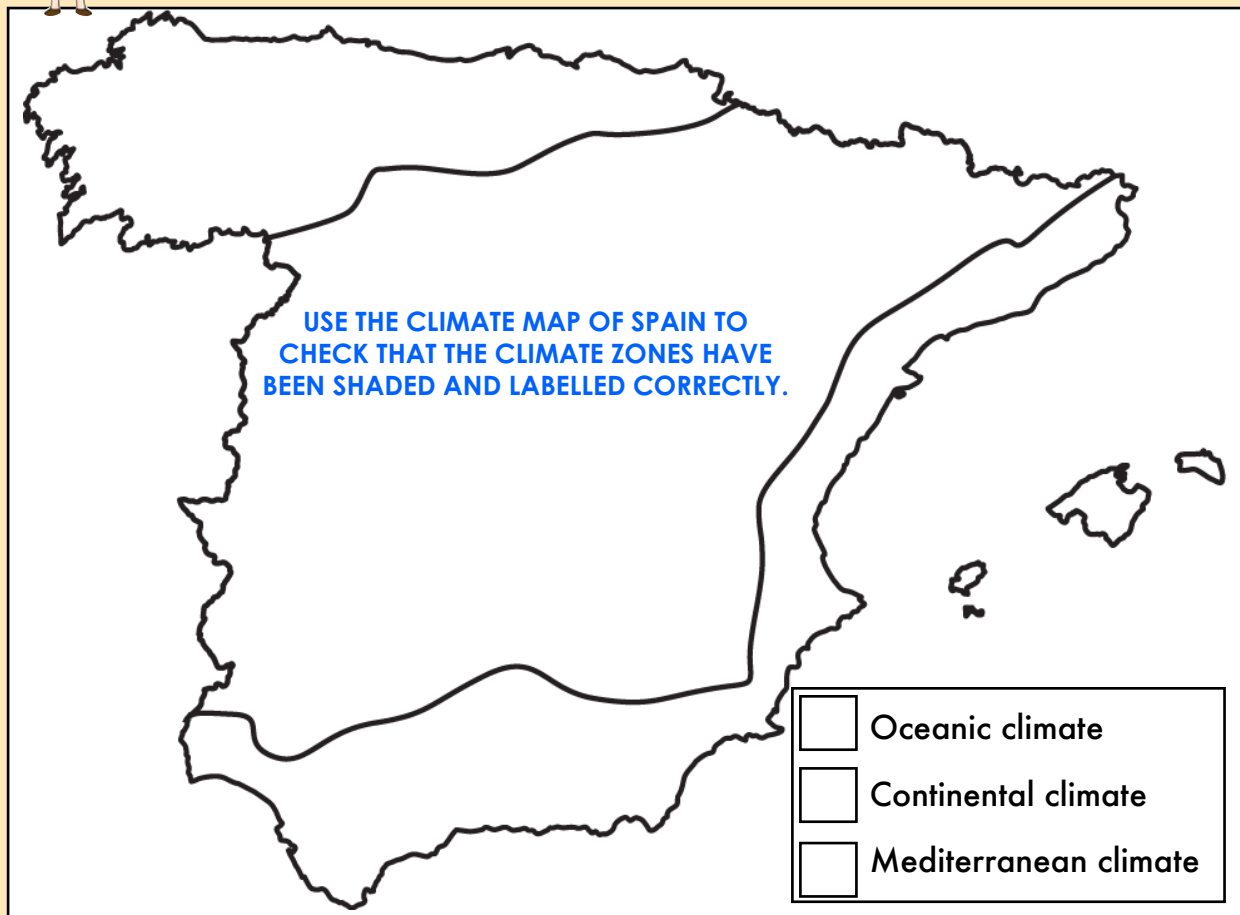
Madrid

Barcelona

Bilbao



Shade in the three main climate zones of Spain and complete the key.



Complete these sentences about the different climate zones in Spain.



There are three main **CLIMATE** zones in Spain. The **NORTH** coast has an **OCEANIC** climate. They have **WARM** summers and **MILD** winters. There is a high amount of **RAINFALL** throughout the year. Most of Spain has a **CONTINENTAL** climate. Winters are cold enough for **SNOW**. Summers are **HOT**. There is a lot of rainfall in **SUMMER**. The **SOUTH** and **EAST** of the country have a **MEDITERRANEAN** climate. There is not much difference between **WINTER** and **SUMMER** temperatures.



Draw and shade in the three main climate zones of Spain, then make a key.

USE THE CLIMATE MAP OF SPAIN TO CHECK THAT THE CLIMATE ZONES HAVE BEEN SHADED AND A KEY CREATED CORRECTLY.

<input type="checkbox"/>	
<input type="checkbox"/>	
<input type="checkbox"/>	

Answer these questions about the climate zones in Spain.



Which climate zone has the highest amount of rainfall? OCEANIC	What climate does the majority of Spain have? CONTINENTAL	In which climate is there a lot of rainfall in spring? CONTINENTAL
Which climate has mild, wet winters? MEDITERRANEAN	What climate would you find in the north of Spain? OCEANIC	What climate zone is the south and east of Spain in? MEDITERRANEAN
In which climate is it cold enough for snow? CONTINENTAL	Which climate has the highest amount of sunshine hours? CONTINENTAL	Which climate zone has the fewest hours of sunshine? OCEANIC

Bilbao

This city has the coolest summers.

Average temperatures range from 9°C to 21°C.

This city has the highest rainfall in November.

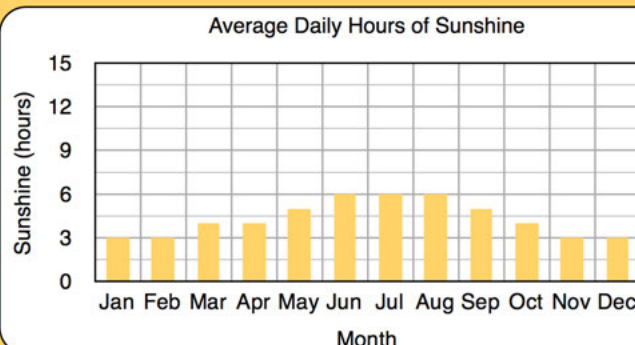
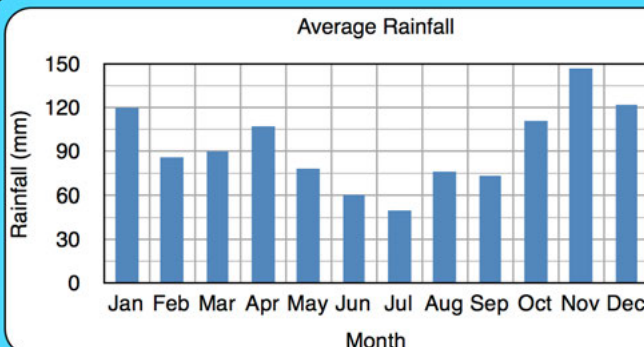
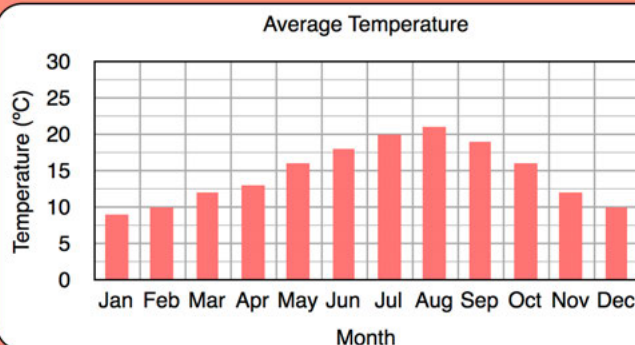
Average rainfall amounts range from 50mm to 147mm pr month.

This city has the least amount of sunshine hours throughout the year.

The average amount of sunshine ranges from 3 to 6 hours per day.

Oceanic climate:

The north of Spain has this climate. The summers are warm and the winters are mild. There is a high amount of rainfall throughout the year, and fewer hours of sunshine than other climate zones in Spain.



This city has the lowest temperature in December and January.

Average temperatures range from 6°C to 26°C.

In this city, August is the month with the least rainfall.

Average rainfall amounts range from 10mm to 56mm per month.

This city has the most amount of sunshine hours throughout the year.

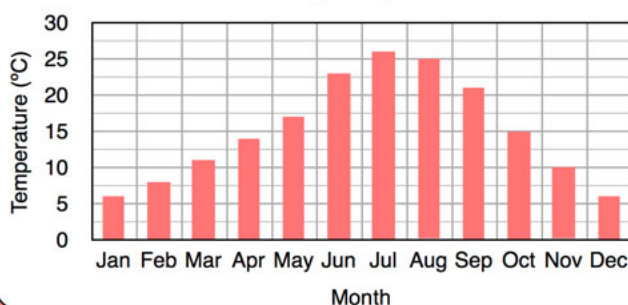
This city has the most sunshine hours in July.

Madrid

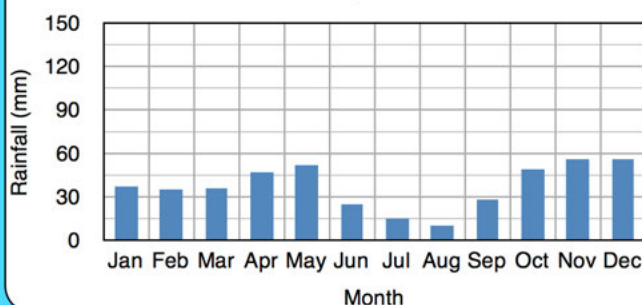
Continental climate:

The majority of Spain has this climate. Summers are hot, with the highest number of hours of sunshine. There is a lot of rainfall in spring. Winters are cold enough for it to snow.

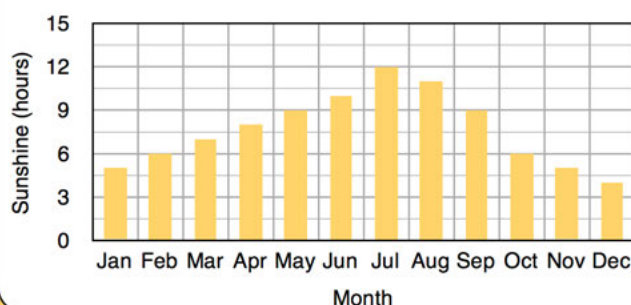
Average Temperature



Average Rainfall



Average Daily Hours of Sunshine



This city has the highest temperature in July and August.

Average temperatures range from 12°C to 26°C.

In this city, October is the month with the most rainfall.

Average rainfall amounts range from 20mm to 91mm per month.

In August, this city has 7 hours of sunshine per day on average.

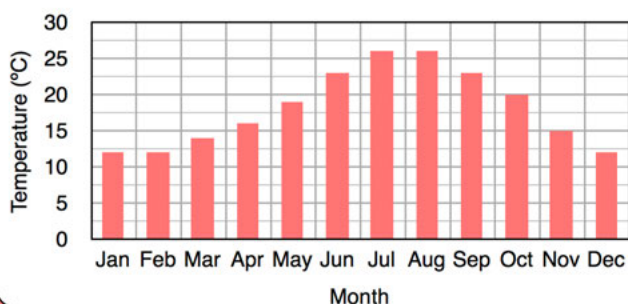
The average amount of sunshine ranges from 4 to 10 hours per day.

Barcelona

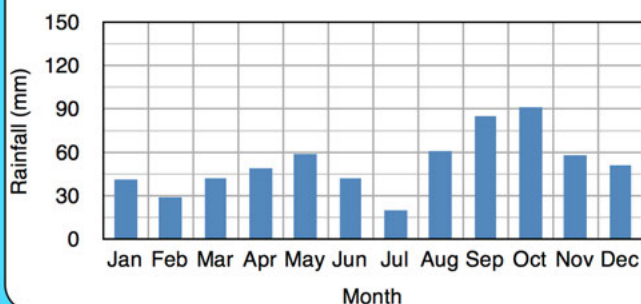
Mediterranean climate:

The south and east coasts of Spain have this climate. This area has mild, wet winters and warm, dry summers. There is not much difference between winter and summer temperatures.

Average Temperature



Average Rainfall



Average Daily Hours of Sunshine

